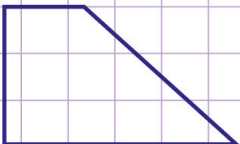
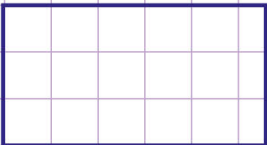
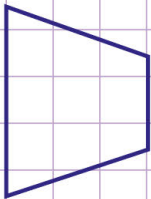
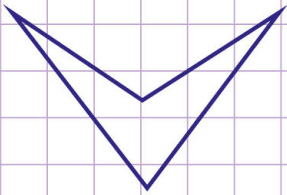
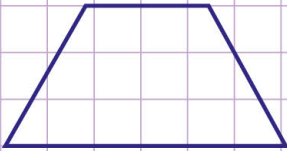


Name: Class:

Identify Trapezoids

A trapezoid is a four - sided shape with sides that have a pair of parallel opposite sides.

Say whether the following quadrilaterals are trapezoids. *Justify your answer.*

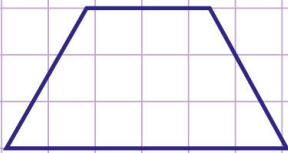


Name: Class:

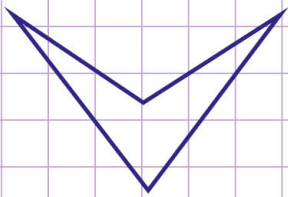
Identify Trapezoids

A trapezoid is a four - sided shape with sides that have a pair of parallel opposite sides.

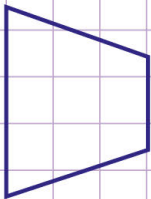
Say whether the following quadrilaterals are trapezoids. *Justify your answer.*



Yes, this quadrilateral is a trapezoid because it has a pair of parallel opposite sides.



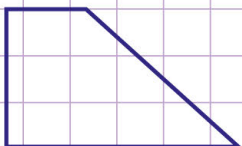
No, this quadrilateral is not a trapezoid because it has no pair of parallel opposite sides.



Yes, this quadrilateral is a trapezoid because it has a pair of parallel opposite sides.



Yes, this quadrilateral is a trapezoid because it has a pair of parallel opposite sides.



Yes, this quadrilateral is a trapezoid because it has a pair of parallel opposite sides.

