

Name: ..... Class: .....



## Lines, line segments and rays

What is the name of this figure ?



.....

What is the name of this figure ?



.....

What is the name of this figure ?



.....

What is the name of this figure ?




.....

What is the name of this figure ?




.....


Identify which of the figures below is a line, ray or line segment (A,B).



is .....



is .....



is .....



Name: ..... Class: .....



## Lines, line segments and rays

What is the name of this figure ?



Line segment EF.

What is the name of this figure ?



Line CD.

What is the name of this figure ?



Ray CB.

What is the name of this figure ?




Line GD.

What is the name of this figure ?




Ray AF.


Identify which of the figures below is a line, ray or line segment (A,B).



is Line segment AB



is Ray AB



is Line AB

